

Şekil Sayı Eşleştirme

→
= 7

×
= 1

□
= 3

⬠
= 6

◊
= 9

☆
= 0

○
= 2


▽
= 8

+

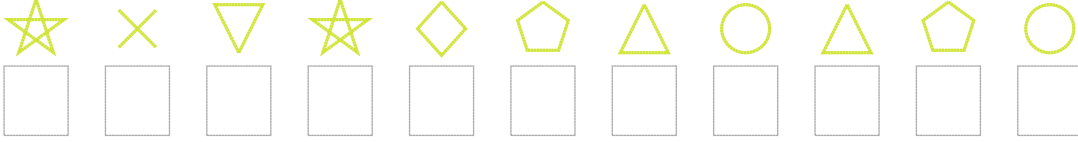
△
= 4

Aşağıdaki uzun şifreleri hatasız çözerek altlarına yazın:

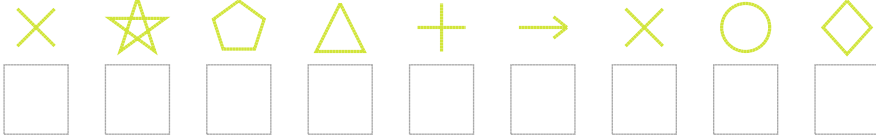
1. Şifre



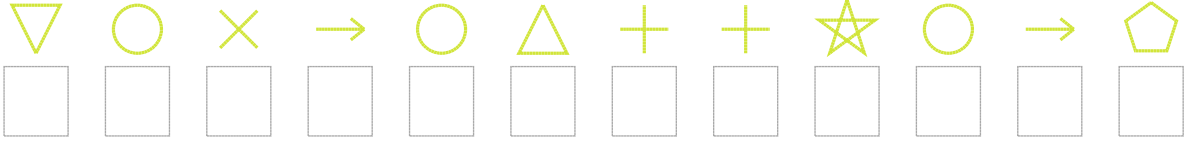
2. Şifre




3. Şifre



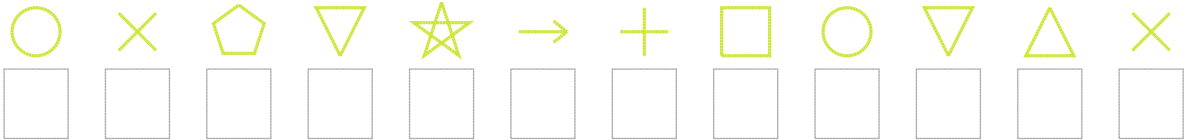
4. Şifre



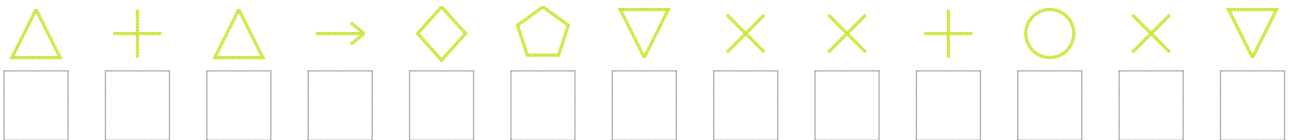
5. Şifre



6. Şifre



7. Şifre



□ BONUS: 7. ve 6. şifrenin üçüncü rakamının toplamı kaçtır?

Cevap Anahtarı

1. Şifre: 62125077433
2. Şifre: 01809642462
3. Şifre: 106457129
4. Şifre: 821724550276
5. Şifre: 243850154001
6. Şifre: 216807532841
7. Şifre: 4547968115218

□ Bonus Soru Cevabı: 10